

---

**2010**

---

Question: 1 – 30

---

**Question: 1**

State the type of hybrid orbitals associated with (i) P in  $\text{PCl}_5$  and (ii) S in  $\text{SF}_6$ .

[1]

**Answer:**

- i.  $\text{sp}^3\text{d}$  of P in  $\text{PCl}_5$
- ii.  $\text{sp}^3\text{d}^2$  of S in  $\text{SF}_6$ .

**Question: 2**

State any one reasons for alkaline metals in general having a greater tendency to form complex than alkali metals.

[1]

**Answer:**

It is due to small size and higher charge on alkali earth metal cations as compared to corresponding alkali metal cations.

**Question: 3**

Name a drug used in case of mental depression.

[1]

**Answer:**

Equanil

**Question: 4**

Write the IUPAC name for any of the isomers with the molecular formula  $[\text{Pt}(\text{NH}_3)_2\text{Cl}_2]\text{Cl}_2$ .

[1]

**Answer:**

Diamine dichloro platinum(IV) chloride.

**Question: 5**

Carefully examine the diagram and name the process involved:

[1]

**Answer:**

The process involved is reverse osmosis because the solvent molecules move from higher concentration to lower concentration.

**Question: 6**

In the transition series, with an increase in atomic number the atomic radius does not change very much. Why is it so?

**Answer:**

As one proceeds along a transition series, the nuclear charge increases which tend to decrease the size but the addition of electrons in the d-subshell increases the screening effect which counter balances the effect of increased nuclear charge.

**Question: 7**

If the close packed cations in an AB type solid have a radius of 75 pm. What would be the maximum and minimum sizes of the anions filling the voids?

[2]

**Answer:**

For closed packed AB type solid,



$$0.414 \leq \frac{r^+}{r^-} \leq 0.732$$

$$0.414 \leq \frac{75\text{pm}}{r^-} \leq 0.732$$

$$\text{or } \frac{1}{0.414} \geq r^- \geq \frac{75\text{pm}}{0.732}$$

$$\text{or } 181.15\text{pm} \geq r^- \geq 102.46\text{pm}$$

Thus size of the anion lies between 102.46 pm and 181.15 pm

**Question: 8**

For the equilibrium  $2\text{H}_2(\text{g}) + \text{O}_2(\text{g}) \rightleftharpoons 2\text{H}_2\text{O}(\text{l})$  at  $25^\circ\text{C}$ .  $\Delta G^\circ$  is  $-474.78 \text{ kJ mol}^{-1}$ . Calculate  $\log K$  for it. ( $R = 8.314 \text{ J K}^{-1} \text{ mol}^{-1}$ ). [2]

**Answer:**

$$\Delta G^\circ = -2.303 RT \log K$$

$$\therefore \log K = \frac{-\Delta G^\circ}{2.303 RT} = \frac{474.78}{2.303 \times 8.314 \times (273 + 25)}$$

$$= -83.2$$

**Question: 9**

Give an example of a fuel cell and write the anode and cathode reactions for it. [2]

**Answer:**

$\text{H}_2 - \text{O}_2$  is an example of fuel cell. The electrode reactions in this cell are



**Question: 10**

Molar conductance of a 1.5 M solution of an electrolyte is found to be  $138.9 \text{ seimen cm}^2$ . What would be the specific conductance of this solution? [2]

**Answer:**

$$\text{Specific conductance} = \text{Molar concentration} \times \text{Molar conductance}$$

$$= 1.5 \times 10^{-3} \text{ mol cm}^{-3} \times 138.9 \text{ S cm}^2$$

$$= 0.208 \text{ S cm}^{-1}$$

**Question: 11 (\*\*) [2]**

- Draw a schematic graph showing how the rate of a first order reaction changes with change in concentration of the reactant.
- Rate of a reaction is given by the equation:  $\text{Rate} = k [\text{A}]^2 [\text{B}]$   
What are the units for the rate and the rate constant for this reaction?

**Question: 12**

Rate constant  $k$  of a reaction varies with temperature according to the equation:



$\log k = \text{constant} - \frac{E_a}{2.303R} \cdot \frac{1}{T}$ , Where  $E_a$  is the energy of activation for the reaction. When a graph is plotted for  $\log K$  versus  $\frac{1}{T}$ , a straight line with a slope  $- 6670 \text{ K}$  obtained? Calculate energy of activation for this reaction. State the units. ( $R = 8.314 \text{ JK}^{-1} \text{ mol}^{-1}$ ) [2]

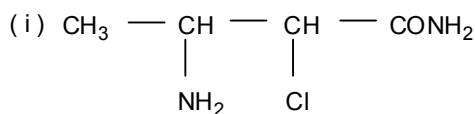
**Answer:**

$$\text{Slope of line} = - \frac{E}{2.303R} = - 6670 \text{ K}$$

$$\begin{aligned} E_a &= 2.303 R \times 6670 \\ &= 2.303 \times 8.314 \times 6670 \\ &= 127711.43 \text{ J mol}^{-1} \end{aligned}$$

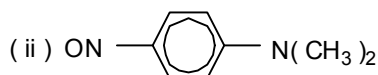
**Question: 12** [2]

Write the IUPAC names for:



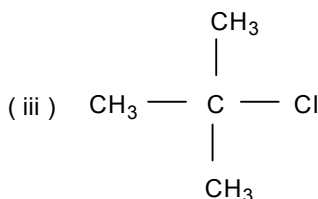
**Answer:**

3-amino -2-chloro butanamide



**Answer:**

p-Nitroso-N, N-dimethylaniline



**Answer:**

2-chloro - 2 - methylpropane

**Question: 13 (\*\*)**

Before reacting aniline with  $\text{HNO}_3$  for nitration, it is converted to acetanilide. Why is this done and how is nitro - aniline obtained subsequently? [3]

**Question: 14**

Why are inter - halogen compounds more reactive than the related elemental halogens? [3]

**Answer:**

This is because the bond between two dissimilar halogen atoms is weaker than the bond between two similar halogen atoms. The overlapping between orbitals of dissimilar atoms is less effective than that between similar atoms.



---

OR

Identify the type of inter – molecular forces that exist between the following pairs: [2]

i.  $\text{Na}^+$  ion and water molecules

**Answer:**

Ion-dipole attraction

ii.  $\text{Ag}^+$  ion and  $\text{I}^-$  ion

**Answer:**

Ion-induced dipole attraction

iii. Argon and Argon

**Answer:**

Dispersion forces

iv. HF and  $\text{H}_2\text{O}$

**Answer:**

H-bonding

**Question: 15 (\*\*)**

Using the values bond approach predict the shape and magnetic character of  $[\text{Co}(\text{NH}_3)_6]^{3+}$ .  
(Atomic number of Co is 27) [3]

**Question: 16**

State the significance of numbers in the polymer names nylon – 6 and nylon – 66. Write the monomers used for making nylon – 66. [3]

**Answer:**

In nylon-6, the repeat unit contains 6 carbon atoms in its molecule. In nylon- 66, these are two repeat units each containing 6 carbon atoms. Nylon-66 is made from hexamethylene diamine and adipic acid.

**Question: 17**

State the significance of primary and secondary structures of proteins. [3]

**Answer:**

*Primary structure*

The sequence in which various amino acids are arranged in a protein is called primary structure. The amino acid sequence of a protein determines its function and is critical of its biological activity.

*Secondary structure*

Secondary structure determines the coiling of the polypeptide chain into helical structure. The secondary structure arises due to regular folding of various polypeptide chains and due to inter-molecular hydrogen bonding between carboxyl and amino acids. It is of two types:  $\alpha$ -helix and  $\beta$ -pleated sheet configuration.

**Question: 18**

What are multi molecular and macromolecular colloids? Give one example of each type. How are associated colloids different from them? [3]



---

**Answer:****Multimolecular colloids**

These are formed when several atoms or molecules are forced to aggregate in dispersion medium e.g. gold sol. These are lyophobic in nature.

**Macromolecular colloids**

These formed when macromolecules of colloidal size are dispersed in dispersion medium e.g. protein in water. These are lyophilic in nature.

**Associated colloids**

Some colloids behave as normal strong electrolytes at low concentration but exhibit colloidal properties at higher concentrations due to the formation of aggregated particles.

These aggregated particles are known as micelles and such substances are known as associated colloids. They behave as true solutions at low concentrations.

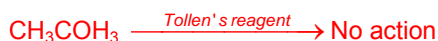
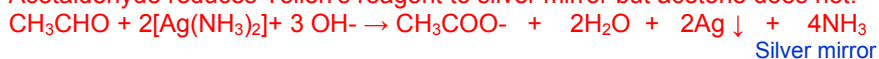
**Question: 19 (\*\*)**

State one chemical method each to distinguish between the following pairs of organic compounds [3]

i. Acetaldehyde and acetone

**Answer:**

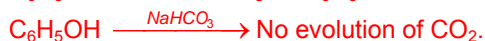
Acetaldehyde reduces Tollen's reagent to silver mirror but acetone does not.



ii. Phenol and benzoic acid

**Answer:**

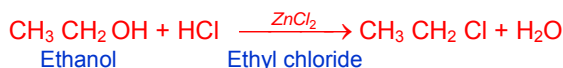
Benzoic acid being a stronger acid than phenol, it decomposes  $\text{NaHCO}_3$  to evolve  $\text{CO}_2$  but phenol does not.



iii. Propanone and ethanol

**Answer:**

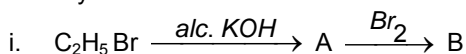
Treat the compound with Lucas reagent (Concentrated  $\text{HCl}$  + anhydrous  $\text{ZnCl}_2$ ) Ethanol gives cloudiness on heating.



Propanone does not give Lucas test.

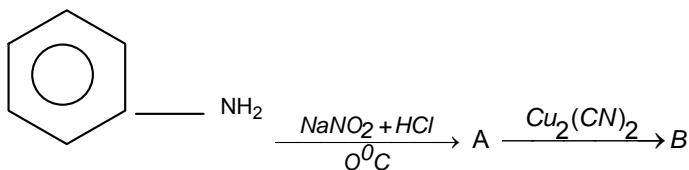
**Question: 20 (\*\*)**

Identify the substance A and B in each of the following sequence of reactions:

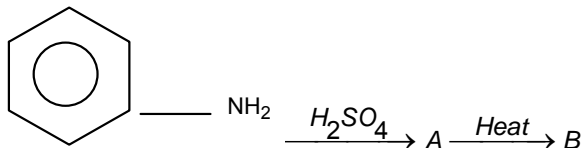


ii.





iii.



**Question: 20 (\*\*)**

- Give the structural formula of DDT
- How DDT is prepared.
- Give its any two use

[3]

**Question: 21 (\*\*)**

Calculate the mole fraction of ethylene glycol ( $\text{C}_2\text{H}_6\text{O}_2$ ) in a solution containing 20% of  $\text{C}_2\text{H}_6\text{O}_2$  by mass.

**Answer:**

Let total mass of solution = 100g

$\therefore$  mass of ethylene glycol  $W_2 = 20\text{g}$   
and mass of Solvent (water)  $W_1 = 80\text{g}$

Molar mass of  $[\text{C}_2\text{H}_6\text{O}_2]$

$$M_1 = 12 \times 2 + 1 \times 6 + 16 \times 2$$

$$M_1 = 24 + 6 + 32 = 62 \text{ g mol}^{-1}$$

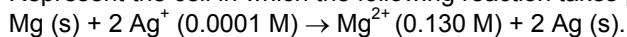
Molar mass of water ( $\text{H}_2\text{O}$ )  $M_2 = 1 \times 2 + 16 = 18 \text{ g mol}^{-1}$

$$\text{Moles of water } n_1 = \frac{W_1}{M_1} = \frac{80}{18} = 4.444 \text{ mol}$$

$$\text{Moles of } \text{C}_2\text{H}_6\text{O}_2, n_2 = \frac{W_2}{M_2} = \frac{20}{62} = 0.322 \text{ mol}$$

**Question: 22 (\*\*)**

Represent the cell in which the following reaction takes place.



Calculate its  $E^\ominus_{\text{cell}}$  if  $E^\ominus_{\text{cell}} = 3.17 \text{ V}$ .

[3]

**Question: 23**

What are anomers? How many anomers of glucose are known? Name them.

[3]

**Answer:**

The pair of diastereoisomers of aldoses which differ in configuration about  $\text{C}_1$  carbon atom are called anomers. These are two anomers of glucose which are:



- 
- i.  $\alpha$  – D-glucose  
ii.  $\beta$  – D-glucose

**Question: 24**

Outline the principles of refining of metals by the following methods:

- i. Zone refining

[2]

**Answer:**

This method is based on the principles that the impurities are more soluble in the melt than in the solid state of the metal.

A circular mobile heater is fixed at one end of the rod of the impure metal. The molten zone moves along with the heater which is moved forward. As the heater moves forward, the pure metal crystallizes out of melt and the impurities pass on into the adjacent molten zone.

This process is repeated several times and the heater is moved in the same direction. At one end, impurities get concentrated.

This method is very useful for producing semiconductor and other metals of very high purity like germanium, silicon, boron etc.

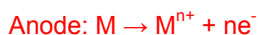
- ii. Electrolytic refining

[2]

**Answer:**

In this method, the impure metal is made to act as anode. A strip of the same metal in pure form is used as Cathode. They are put in a suitable electrolyte both containing soluble salt of the same metal. The more basic metal remains in the solution and the less basic ones mud.

The reactions are,



Copper and zinc are refined by this method.

- iii. Distillation

[1]

**Answer:**

In this method, the impure metal is evaporated to obtain the pure metal as distillate. This method is very useful for low boiling metals like zinc and mercury.

OR

The following rate data were obtained at 300 K for the reaction  $2A + B \rightarrow C + D$ :

Experiment No.	[A] mol L <sup>-1</sup>	[B] mol L <sup>-1</sup>	Rate of formation of D mol L <sup>-1</sup> min <sup>-1</sup>
1.	0.1	0.1	$6.0 \times 10^{-3}$
2.	0.3	0.2	$7.2 \times 10^{-2}$
3.	0.3	0.4	$2.88 \times 10^{-1}$
4.	0.4	0.1	$2.4 \times 10^{-2}$

Calculate the rate of formation of D when  $[A] = 0.5 \text{ mol L}^{-1}$  and  $[B] = 0.2 \text{ mol L}^{-1}$ . (\*\*)

[5]





---

**Question: 25**

Define the terms molarity and molality for a solution. How does a rise in room temperature change the molarity and molality values of the solution?

How much urea (molar mass =  $60 \text{ g mol}^{-1}$ ) should be dissolved in 50g of water so that its vapor pressure at room temperature is reduced by 25 %. Calculate molality of the solution obtained. [5]

OR

Explain why transition metals are:

- Paramagnetic
- Good catalysts.

**Answer:**

Molarity of a solution is the number of moles of solute dissolved in one liter of the solution. Molarity of a solution changes with temperature due to change in volume with temperature.

Molality of a solution is the number of moles of solute dissolved in one kilogram of the solvent. It does not change with temperature.

$$\frac{P_A^0 - P_A}{P_A^0} = x_B \approx \frac{W_B / M_B}{W_A / M_A} = \frac{W_B}{M_B} \times \frac{M_A}{W_A}$$
$$\text{or, } \frac{25}{100} = \frac{W_B}{60} \times \frac{18}{50}$$
$$W_B = \frac{25 \times 60 \times 100}{100 \times 18} = 41.667\text{g}$$

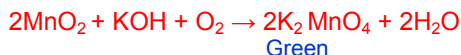
**Question: 25**

Describe how potassium permanganate is made from pyrolusite. Write the chemical equations for the involved reactions.

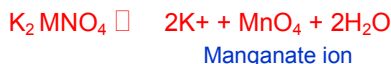
Describe with an example each the oxidizing actions of permanganate ion in alkyl – line and acidic media. What acid and alkali are usually used? [5]

**Answer:**

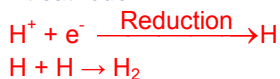
Finely powdered pyrolusite is fused with KOH in the presence of air to give green colored potassium manganate.



Potassium manganate is electrolyzed in a tank having nickel anode and iron cathode. Manganate ion is oxidized into permanganate ion.

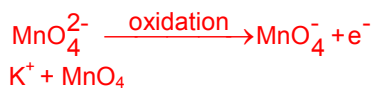


At cathode:



At anode:





*In acidic medium:*

KMnO<sub>4</sub> oxidizes ferrous sulphate into ferric sulphate in the presence of dil H<sub>2</sub>SO<sub>4</sub>.



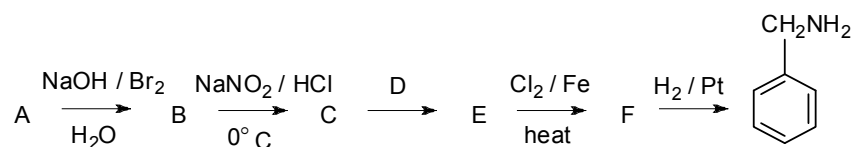
*Alkaline medium:*

In the presence of conc. KOH, potassium iodide is oxidized potassium iodate.



OR

Write the structures of the reagents / organic compounds A to F in the following sequence of reactions: (\*\*)



- A. Benzamide
- B. Aniline
- C. Benzene diazonium chloride
- D. Pot. Cyanide
- E. Benzonitrile
- F. m – chloro cyanobenzene

(\*\*) Currently out of syllabus. Answer can be provided up on request

